


## Writing

Can you draw a picture of your favourite place and write a sentence explaining why it's your favourite.



---

---

---

---


---

---

## Mental Maths

Use the number line to complete the number sentence.

$$13 + 4 = \square$$



## Maths

Can you solve these calculations?

three + 5

2 + ●●●●●

9 + zero

seven + two

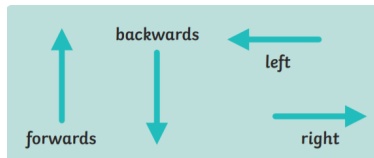
■ ■ ■ ■ + 4

one + six

Pick a challenge to complete this week.

### Computing

Can you give someone instructions on how to move? For example walk 3 steps forwards, turn to the left, walk 2 steps backwards



### Geography

Make a 3D model of a famous London landmark



### Science

Can you create a fact file about an animal?  
Remember to label the features and include details about their characteristics, diet and habitat.




### PSHE

Draw a picture of what you would like to be when you grow up. Have a go at writing a sentence to explain your dream job.



### RE

Have a go at making some Challah bread with your family. Why is Challah bread eaten on Shabbat?



### PE

Can you create an 8 step sequence dance to your favourite song?



Year 1's  
Home Learning

Homework due back on  
05.02.25